

1	$9 - 4 =$																			

2	$3 + 10 + 6 =$																			


3	$18 - 7 =$																			

4	$7 \times 2 =$																			


5	$60 - 10 =$																			



11  $32 + 28 =$



12  $58 - 20 =$




13  $\frac{1}{4}$  of 16 =



14  $43 + 36 =$

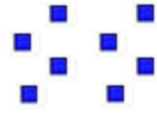




15  $57 - 42 =$



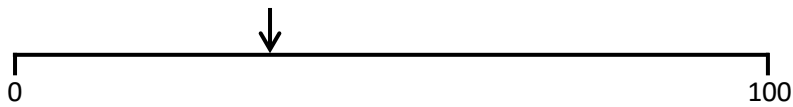
16

a) Write the number, which these resources represent. \_\_\_\_



b) There are \_\_\_\_ hundreds, \_\_\_\_ tens and \_\_\_\_ ones.

17



Estimate the number where the arrow is pointing.

18

Order these numbers from **smallest to largest**.

350	672	130	99	901
833	491	275	500	705

19

Put in the correct symbol > or <

701                      598

20

Write the number 472 in words.

## ANSWERS

- 1) 5
- 2) 19
- 3) 11
- 4) 14
- 5) 50
- 6) 48
- 7) 9
- 8) 93
- 9) 100
- 10) 15
- 11) 60
- 12) 38
- 13) 4
- 14) 79
- 15) 15
- 16) a)238  
b) 2 3 8
- 17) Anything between 30 and 40 (actual number is 34)
- 18) 99, 130, 275, 350, 491, 500, 672, 705, 833, 901
- 19)  $701 > 598$
- 20) Four hundred and seventy two