




5 $40 - 10 =$




6 $6 + 43 =$



7 $6 \times 5 =$



8 $95 + 7 =$



9 $30 + 40 =$




10 + 8 = 16




11 $\frac{1}{2}$ of 10 =



12 $8 \div 2 =$



13 Write the number, which these resources represent.



14 Complete this:

25, 35, 45, _____, 65, _____

125, 135, 145, _____, 165, _____

15 Complete this:

446, 456, 466, _____, 486, _____

981, 991, _____, 111, 121, _____

16 Complete this:

252, 352, 452, _____, 652, _____

568, 668, 768, _____, 968, _____

ANSWERS

1) 3

2) 20

3) 13

4) 8

5) 30

6) 49

7) 30

8) 102

9) 70

10) 8

11) 5

12) 4

13) 232

14) 55 75

155 175

15) 476 496

101 131

16) 552 752

868 1068