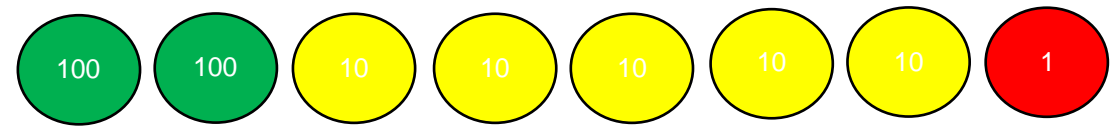
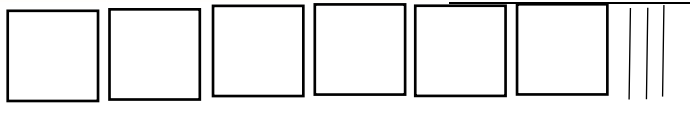
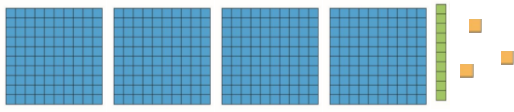


LO: To vary the order and practice

Learning Task 1: Write the numbers these resources represent



Learning Task 2:

Find the value of the missing numbers.

$$\square = 500 + 40 + 9$$

$$203 = \square + 3$$

$$897 = 800 + \square + 7$$

$$\square + 30 + 5 = 935$$

$$449 = 400 + \square + 40$$

Learning Task 3: Write the number that has...

1. Four hundreds, nine tens and three ones _____
2. Nine tens, three ones and four hundreds _____
3. Three tens, five hundreds and one _____
4. Nine ones, seven tens and five hundreds _____
5. Eight more than zero tens and four hundreds _____

Learning Task 4: Write the value of '4' in the following numbers:

e.g. 466g 400g

435cm _____

249ml _____


940m _____

784cm _____

3459g _____

Learning Task 5: Reasoning red task

Miss Lyons says: "There are 70 tens in 578." Why is this incorrect? Explain.

2 

$\square + 30 + 1 = 731$

$449 = 400 + \square + 40$