

LO: To review place value and regrouping

AFL - Learning Review 1: Complete the below

Example 567 is 5 hundreds, 6 tens and 7 ones.
 $500 + 60 + 7 = 567$

149 is _____ hundreds, _____ tens and _____ ones.

_____ + _____ + _____ = 149

382 is _____ hundreds, _____ ones and _____ tens.

_____ + _____ + _____ = 382

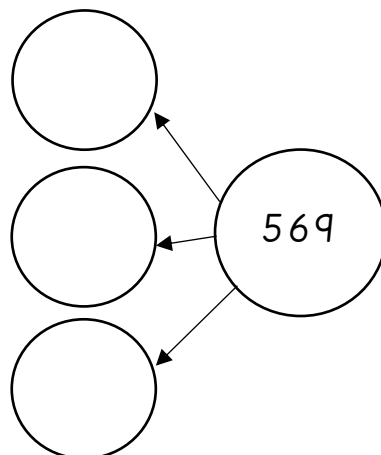
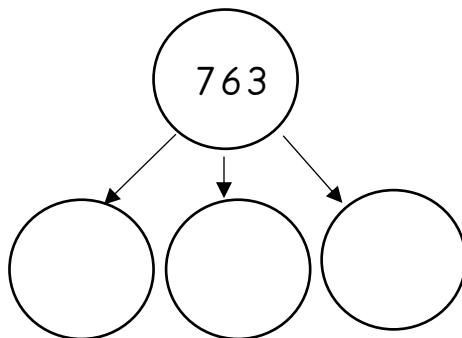
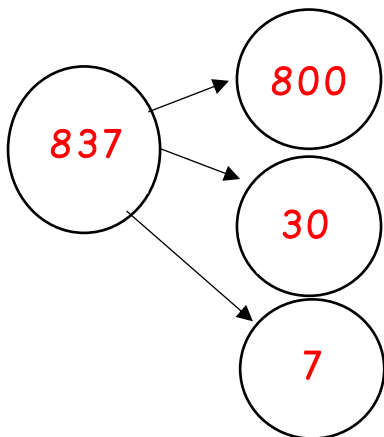
571 is _____ hundreds, _____ tens and _____ ones.

_____ + _____ + _____ = 571


405 is _____ hundreds, _____ ones and _____ tens.


_____ + _____ + _____ = 405

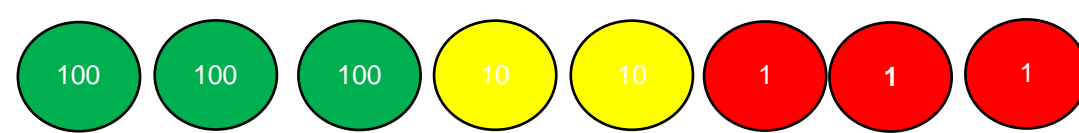
Learning Review 2: Complete these cherry models.




Learning Review 3: Write the numbers these resources represent







Learning Review 4: Represent these numbers using dienes representations.

134 = 

56 =

341 =

237 =

Learning Review 4: Find the value of the missing numbers.

+ 50 + 7 = 857

700 + + 3 = 763

499 = 400 + 90 +

Learning Review 5 : Write the value of '6' in the following numbers:

e.g. 5**6**7 60

635 _____

856 _____

765 _____

286 _____

659 _____

14.09.2020

LO: To review place value and regrouping from week 1

Learning Review 6

10 ones = 1 ten 40 ones = 4 tens

30 ones = _____ tens

70 ones = _____ tens

5 tens = _____ ones

6 tens = _____ ones

1 hundred = 10 tens 4 hundreds = 40 tens

5 hundreds = _____ tens

7 hundreds = _____ tens

30 tens = _____ hundreds

60 tens = _____ hundreds