
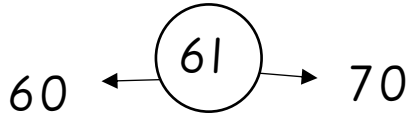
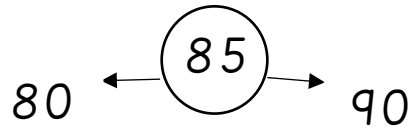
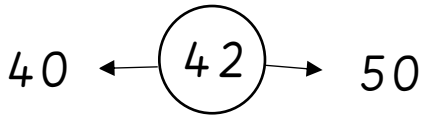


15.09.20

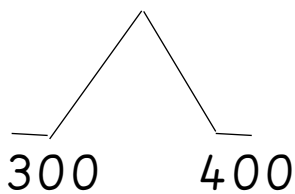
LO: To round numbers to nearest 10, 100 and 1000

Learning Task 1: Circle the correct nearest ten.

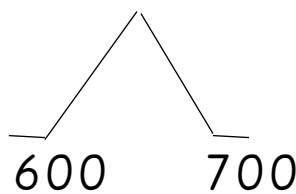


Learning Task 2: Circle the correct nearest hundred

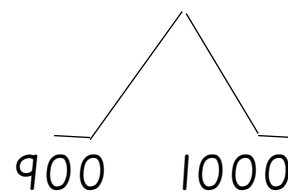
358



613



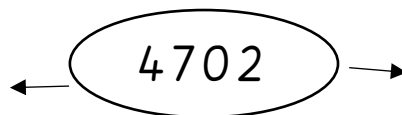
987




Learning Task 3: Write the thousand before, ten after and write the correct rounding to ten in the speaking frame.



_____ is the thousand before and _____ is the thousand after
_____ is closer to _____ than _____
_____ is approximately equal to _____

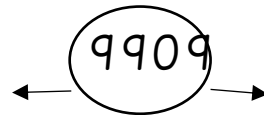

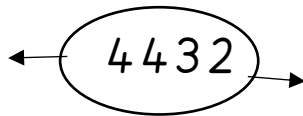


_____ is the thousand before and _____ is the thousand after
_____ is closer to _____ than _____
_____ is approximately equal to _____

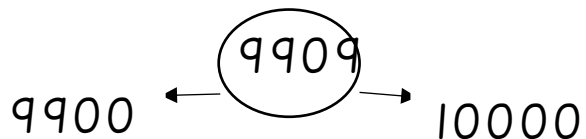

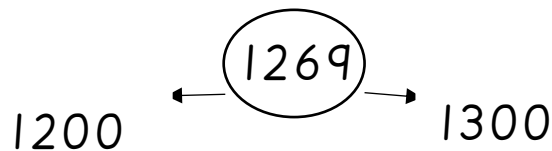
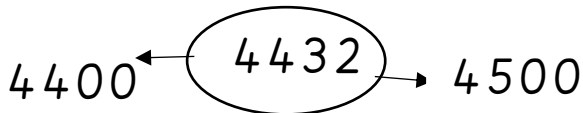


_____ is the ten before and _____ is the ten after
_____ is closer to _____ than _____
_____ is approximately equal to _____


Learning Task 4: Write the thousand before and thousand after then circle the correct nearest thousand



Learning Task 5: Circle the correct nearest hundred



Learning Task 6: Write the hundred before and hundred after then circle the correct nearest hundred



Learning Task 7: Circle the correct nearest ten

4530 ← (4543) → 4540

2160 ← (2169) → 2170

770 ← (774) → 780

9400 ← (9409) → 9410

Learning Task 8: Write the ten before and ten after then circle the correct nearest ten

← (1815) →

← (8003) →

← (6054) →

← (9809) →