

8.9.2021

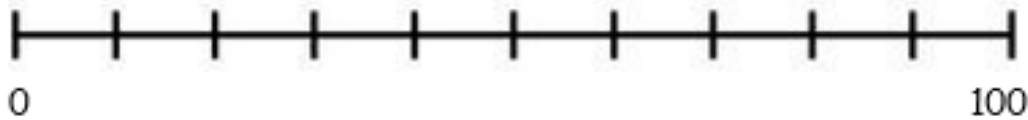
L.O To explore number magnitude up to a million

Task 1


Place **5** on the number line.



Place **95** on the number line.



Place **11** on the number line.



Place **32** on the number line.



Task 2

Where would the number 50 be on this number line?

**0** **100**  
\_\_\_\_\_

Where would the number 70 be on this number line?

**0** **100**  
\_\_\_\_\_

Where would the number 20 be on this number line?

**0** **100**  
\_\_\_\_\_

Where would the number 80 be on this number line?

**0** **100**  
\_\_\_\_\_


### Task 3

Draw an arrow showing the position of each number on the number line.

2,050



Estimate the value of A, B and C



### Task 4

