

To round 3 digit numbers to nearest ten

Learning Task 1: Circle the correct nearest ten

430 ← (432) → 440

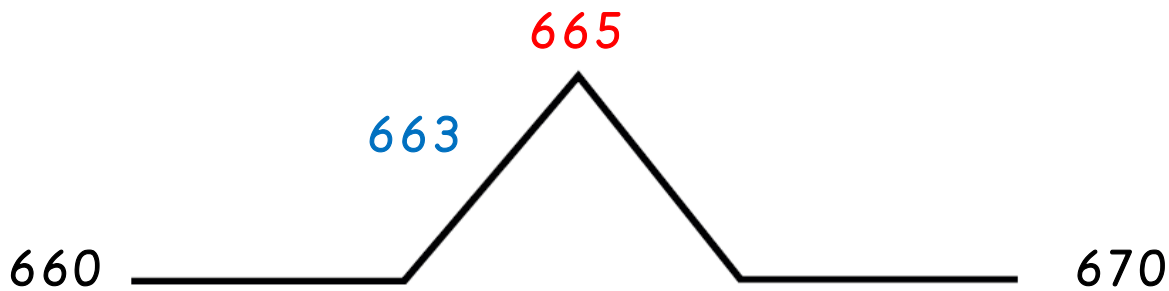
260 ← (266) → 270

770 ← (774) → 780

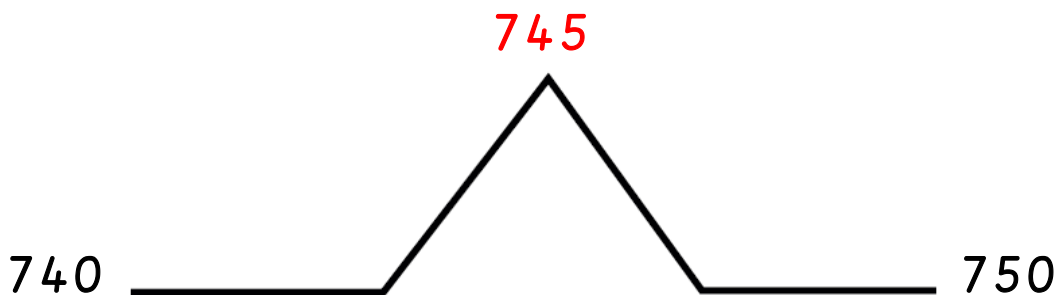
900 ← (909) → 910

Learning Task 2:

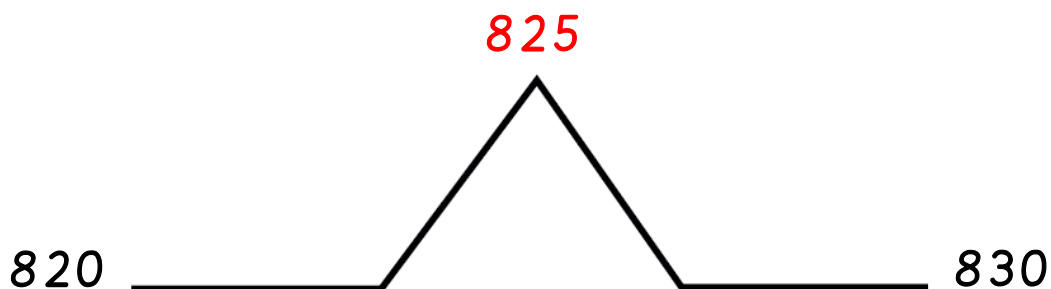
663 rounded to the nearest 10 is _____.



1) 747 rounded to the nearest 10 is _____.




2) 823 rounded to the nearest 10 is _____.




Learning Task 3:

Circle the correct number.


- a) Does 784 round down to 780 or round up 790 when rounding to the nearest 10?



- b) Does 462 round to 460 or 470 when rounding to the nearest 10?



- c) Does 389 round to 380 or 390 when rounding to the nearest 10?



Learning Task 4:

Which numbers when rounded to the nearest ten give 1000.