

LO: To identify parts of a regrouped number in a variety of models.

Vocabulary

One

Ten Ones

Ten

Hundred

Equal

Digit

Number

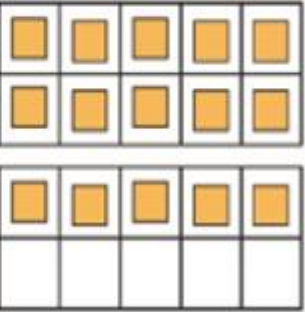
Regrouping

Part whole model

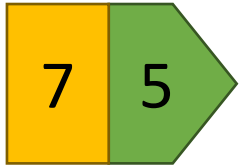


What can you see?



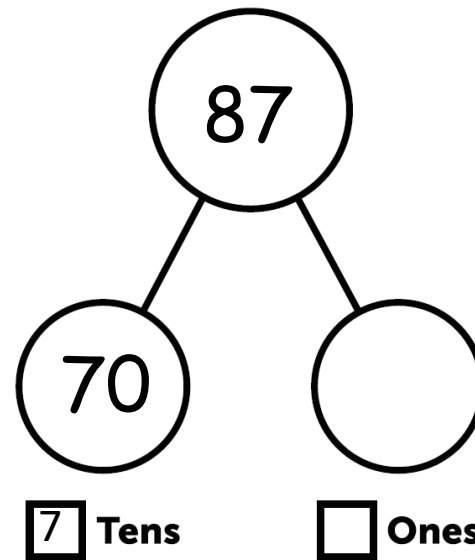
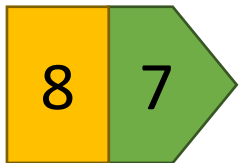
Tens	Ones
	

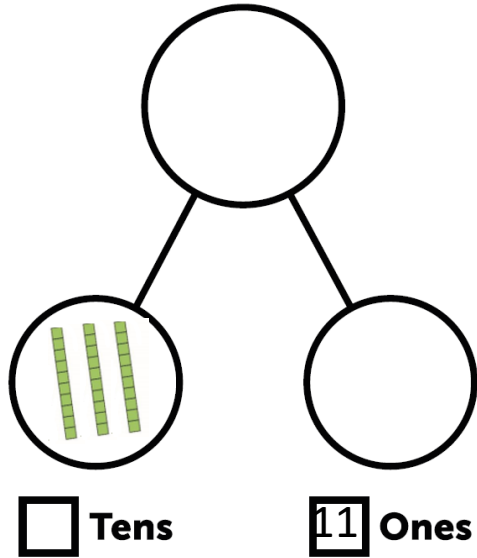
What is missing?



Tens	Ones																				
	<table border="1"><tr><td>■</td><td>■</td><td>■</td><td>■</td><td>■</td></tr><tr><td>■</td><td>■</td><td>■</td><td>■</td><td>■</td></tr><tr><td>■</td><td>■</td><td>■</td><td>■</td><td>■</td></tr><tr><td></td><td></td><td></td><td></td><td></td></tr></table>	■	■	■	■	■	■	■	■	■	■	■	■	■	■	■					
■	■	■	■	■																	
■	■	■	■	■																	
■	■	■	■	■																	

What is missing?



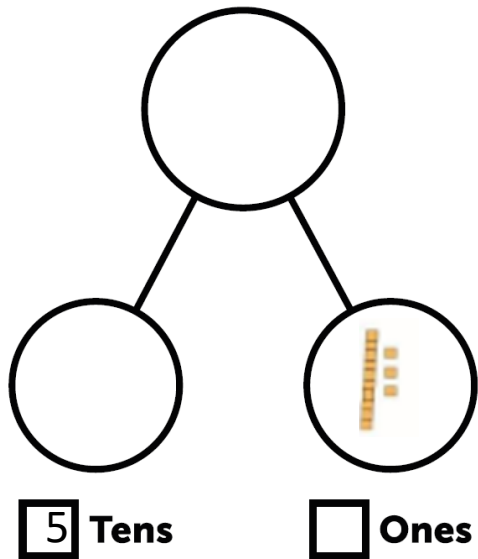


What number is being represented here?

What do we know?

$$3 \text{ tens} + 11 \text{ ones} = 41$$

$$30 + 11 = 41$$



What number is being represented here?

What do we know?

$$5 \text{ tens} + 13 \text{ ones} = 63$$

$$50 + 13 = 63$$

Who am I?

I have 15 ones.

I am between 30 and 40.

Who am I?

How many tens do I have?

Who am I?

I have 12 ones.

I am between 70 and 80.

Who am I?

How many tens do I have?

The two calculations are the same in both calculation, what is the missing information?

$$3 \text{ tens} + \underline{\quad} = 32$$

$$\underline{\quad} + 22 = \underline{\quad}$$

$$7 \text{ tens} + \underline{\quad} = 77$$

$$\underline{\quad} + 27 = \underline{\quad}$$