

LO: To highlight the place value of an identified number.

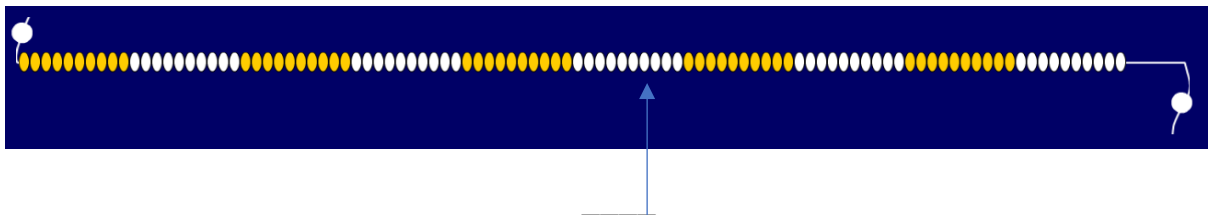
Learning Task 1

On the beadstrings identify the numbers



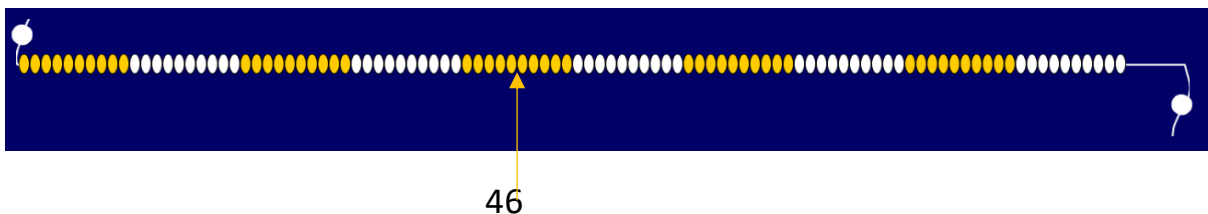
I can see 3 tens and 7 ones.

37 is 7 more than 30.



I can see ____ tens and ____ ones.

__ is ____ more than 50.



I can see ____ tens and ____ ones.

40 is ____ fewer than ____.

Learning Task 2

Identify the missing numbers. 35 is 5 more than 30.

____ is 8 more than 40.


____ is 3 more than 80.

40 is 8 fewer than ____.


80 is 3 fewer than ____.

Learning Task 3


Draw an arrow on the beadstrings to identify the numbers 13, 53, 84.



There are ____ tens and ____ ones.

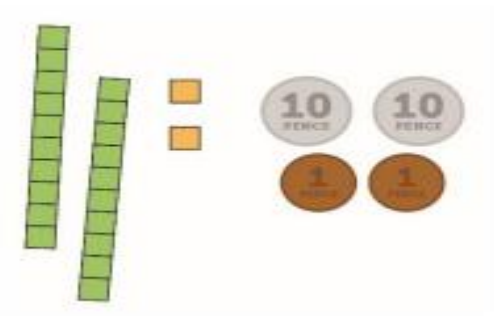


There are ____ tens and ____ ones.



There are ____ tens and ____ ones.

Challenge



Show me the equivalent value on your beadstring. What do you know about this number?

