

30.09.2021

L.O To order numbers with up to 3 decimals places

Task 1

Here are some numbers in a place value chart.






Ones	Tenths	Hundredths	Thousandths
3	2	3	4
3	1	6	
3	2	0	8
3	1	4	5

Write the numbers in order, starting with the greatest.

<input type="text"/>	<input type="text"/>	<input type="text"/>	<input type="text"/>
----------------------	----------------------	----------------------	----------------------

Task 2

Mo, Amir, Ron, Teddy and Jack are measuring their heights with a metre rule.

Mo	Amir	Ron	Teddy	Jack
				
1.35 m	1.53 m	1.32 m	1.3 m	1.5 m

Write the names and heights of the children in order from shortest to tallest.

Name	Height

Task 3

Write the numbers in ascending order.

a) 0.45 0.654 0.546 0.405

--	--	--	--

b) 7.2 kg 7.212 kg 7.21 kg

--	--	--

c) 25.391 25.309 25.093 25.193

--	--	--	--

Seek and destroy the errors in my number lines!

