

### Arithmetic and Reasoning Homework 3

All pupils to complete the first 5 questions.

1	$9 - 7 =$	

2	$4 + 10 + 5 =$	

3	$19 - 6 =$	

4	$6 \times 2 =$	

5	$70 - 10 =$	

6  $6 + 32 =$



7  + 15 = 22




8  $93 + 8 =$



9  $20 + 60 =$



10  $\frac{1}{2}$  of 24 =



11     $23 + 37 =$



12     $39 - 20 =$


13     $\frac{1}{4}$  of 20 =


14     $45 + 34 =$


15     $64 - 51 =$


16 Write the number, which these resources represent.



17 If you ordered these numbers from **smallest to largest**, what would the 4th number be?

342    76    125    8    27    786

18 Can you think of a number to make these correct?

\_\_\_\_\_ > 672

\_\_\_\_\_ < 672

19 Circle the correct nearest ten.

40 ← (42) → 50

80 ← (86) → 90

60 ← (61) → 70

30 ← (37) → 40



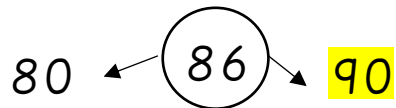
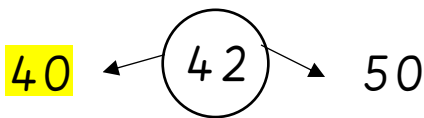
20 Circle all the numbers that could be rounded to 80

89    82    74    85    76    56    84    79

ANSWERS

- 1) 2
- 2) 19
- 3) 7
- 4) 12
- 5) 60
- 6) 38
- 7) 7
- 8) 101
- 9) 80
- 10) 12
- 11) 60
- 12) 19
- 13) 5
- 14) 79
- 15) 13
- 16) 324
- 17) 125
- 18) Check individual answer

19) Circle the correct nearest ten.



20) Circle all the numbers that could be rounded to 80

89   **82**   74   85   **76**   56   **84**   **79**